



Cambridge International Examinations
Cambridge Ordinary Level

GEOGRAPHY

2230/02

Paper 2 Skills

May/June 2018


(FOR CENTRES IN BRUNEI)

INSERT

1 hour 30 minutes

READ THESE INSTRUCTIONS FIRST

This Insert contains Fig. 3.1 for Question 3, Fig. 4.2 and Fig. 4.3 for Question 4, and Fig. 5.1 for Question 5.



This document consists of **4** printed pages.

Fig. 3.1 for use with Question 3

India climatic zone map

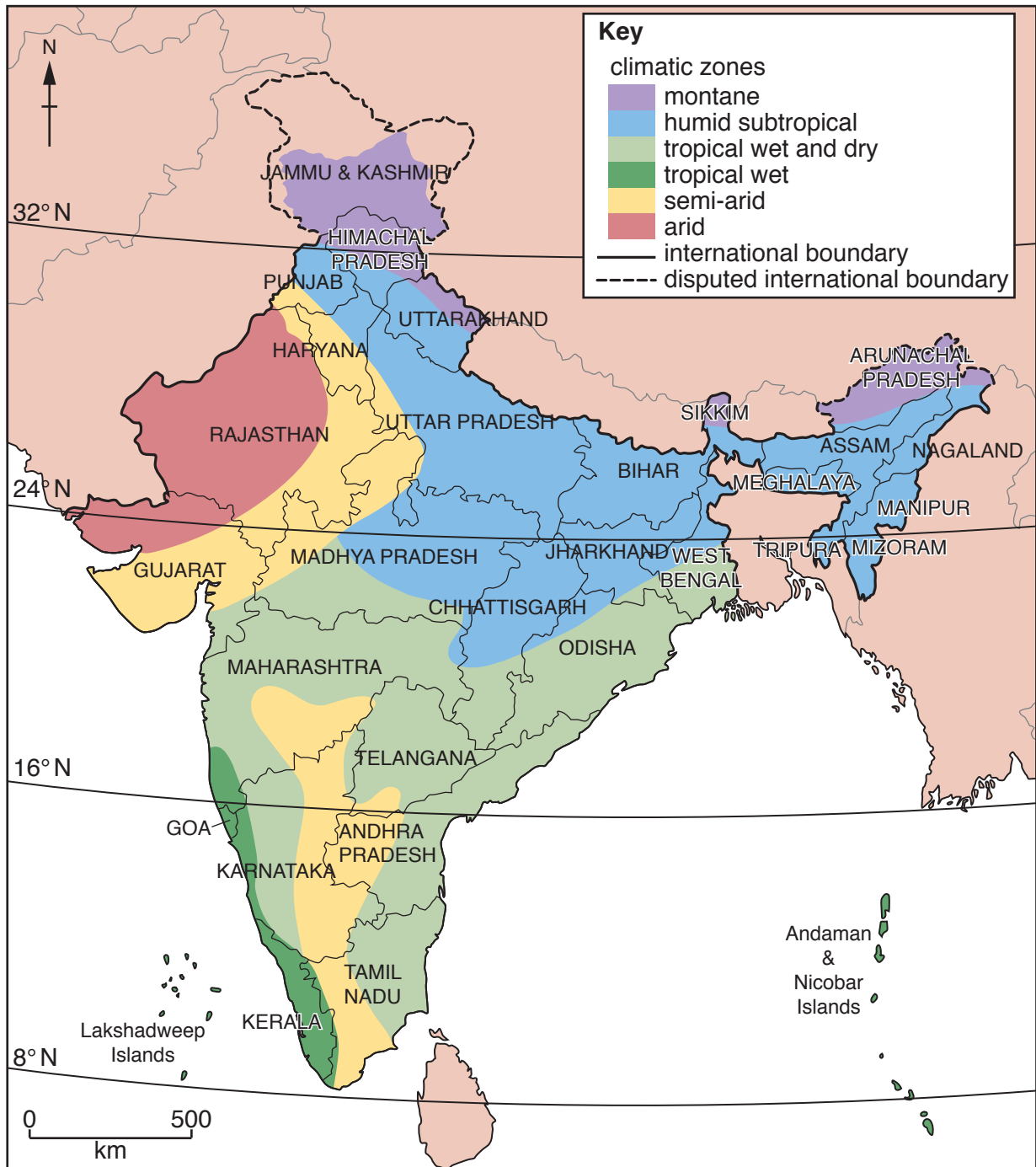


Fig. 4.2 for use with Question 4

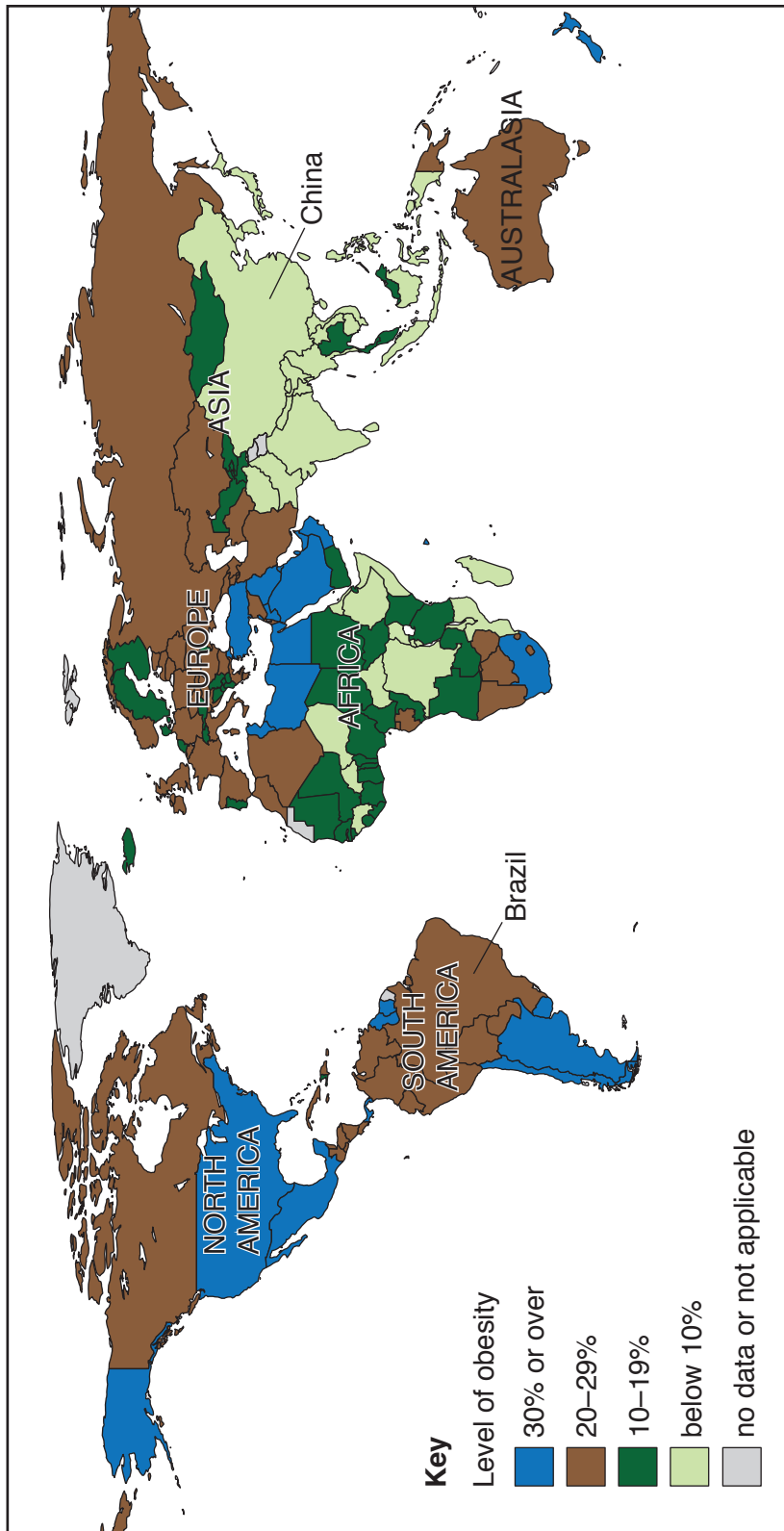


Fig. 4.3 for use with Question 4



Fig. 5.1 for use with Question 5

Levels of obesity, 2014



Permission to reproduce items where third-party owned material protected by copyright is included has been sought and cleared where possible. Every reasonable effort has been made by the publisher (UCLES) to trace copyright holders, but if any items requiring clearance have unwittingly been included, the publisher will be pleased to make amends at the earliest possible opportunity.

To avoid the issue of disclosure of answer-related information to candidates, all copyright acknowledgements are reproduced online in the Cambridge International Examinations Copyright Acknowledgements Booklet. This is produced for each series of examinations and is freely available to download at www.cie.org.uk after the live examination series.

Cambridge International Examinations is part of the Cambridge Assessment Group. Cambridge Assessment is the brand name of University of Cambridge Local Examinations Syndicate (UCLES), which is itself a department of the University of Cambridge.