

GEOGRAPHY

2230/01

Paper 1 Themes

October/November 2017


(FOR CENTRES IN BRUNEI)

INSERT

1 hour 45 minutes

READ THESE INSTRUCTIONS FIRST

This Insert contains Photograph A for Question 4, Fig. 9 for Question 5 and Fig. 11 for Question 6.



This document consists of 4 printed pages.

Photograph A for use with Question 4

A rice growing area in Indonesia



Fig. 9 for use with Question 5

Hawaiian island of Kauai

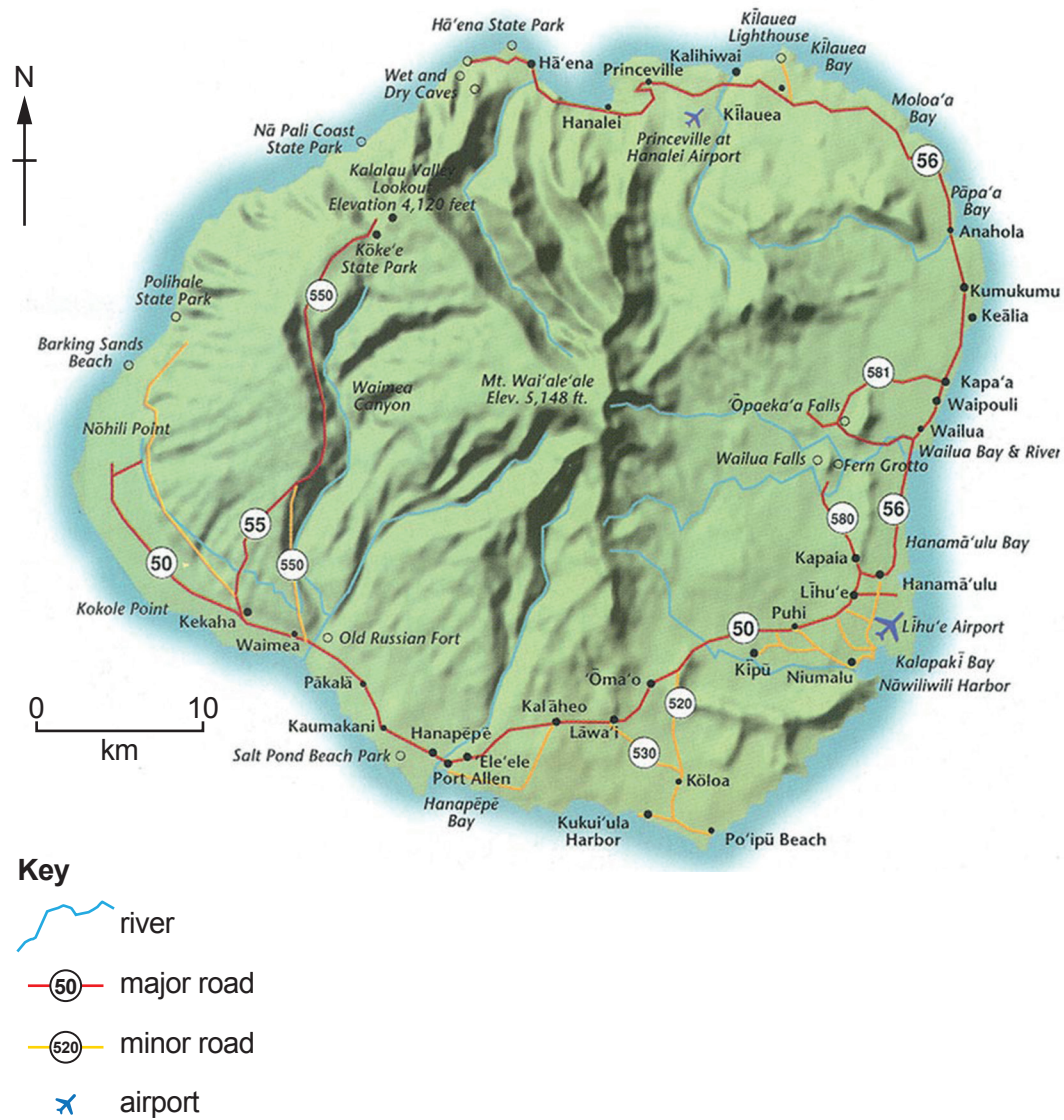
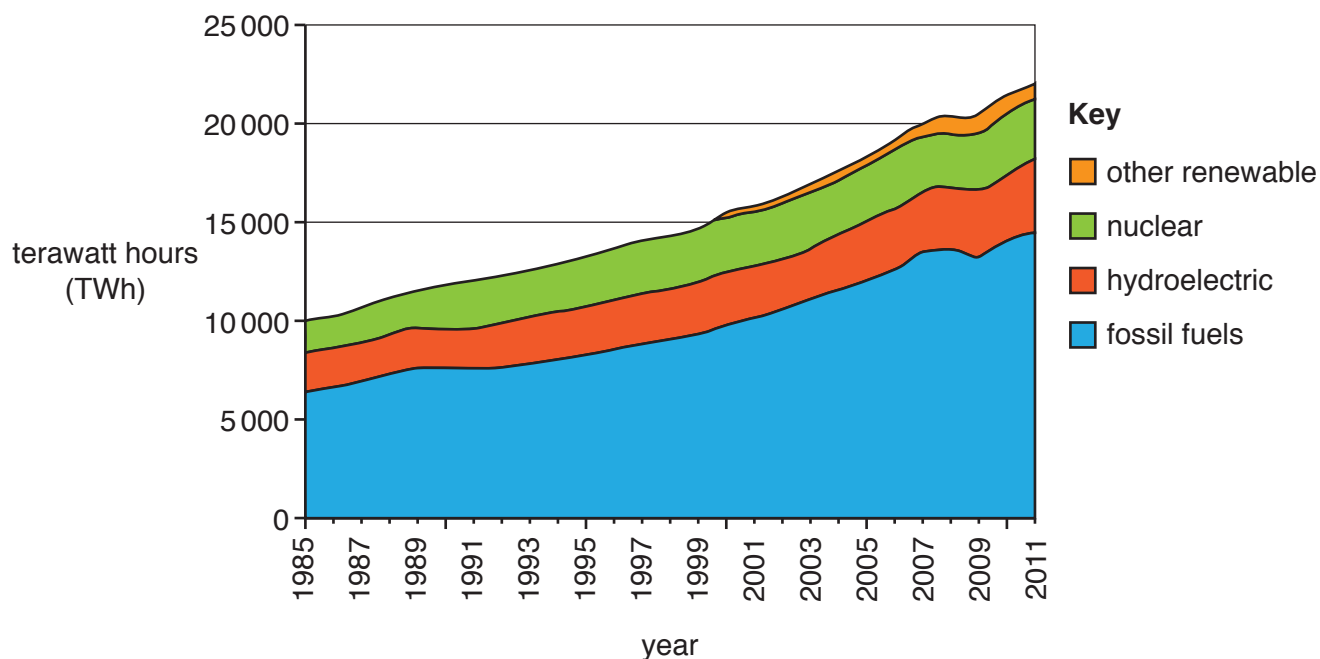


Fig. 11 for use with Question 6

World: sources of energy production



Permission to reproduce items where third-party owned material protected by copyright is included has been sought and cleared where possible. Every reasonable effort has been made by the publisher (UCLES) to trace copyright holders, but if any items requiring clearance have unwittingly been included, the publisher will be pleased to make amends at the earliest possible opportunity.

To avoid the issue of disclosure of answer-related information to candidates, all copyright acknowledgements are reproduced online in the Cambridge International Examinations Copyright Acknowledgements Booklet. This is produced for each series of examinations and is freely available to download at www.cie.org.uk after the live examination series.

Cambridge International Examinations is part of the Cambridge Assessment Group. Cambridge Assessment is the brand name of University of Cambridge Local Examinations Syndicate (UCLES), which is itself a department of the University of Cambridge.